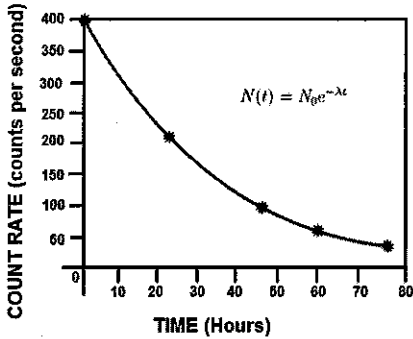


Lesson 1 Assignment Characteristics of Exponential Functions

For each graph, determine the y-intercept, whether it's increasing or decreasing, the domain, and range.

1. Radioactive Decay of Sodium-24



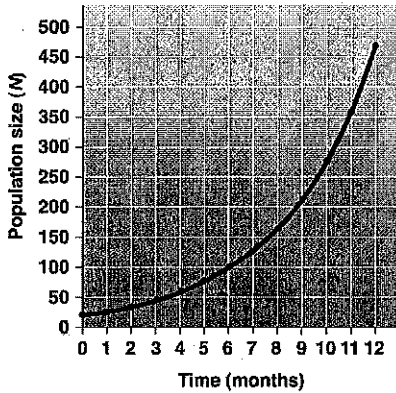
Y-Intercept: _____

Increasing/Decreasing: _____

Domain: _____

Range: _____

2.



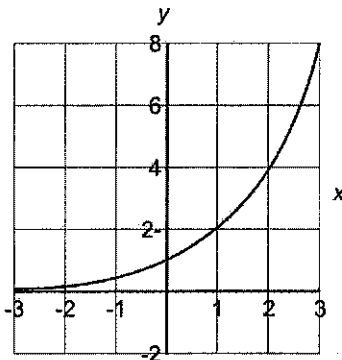
Y-Intercept: _____

Increasing/Decreasing: _____

Domain: _____

Range: _____

3.



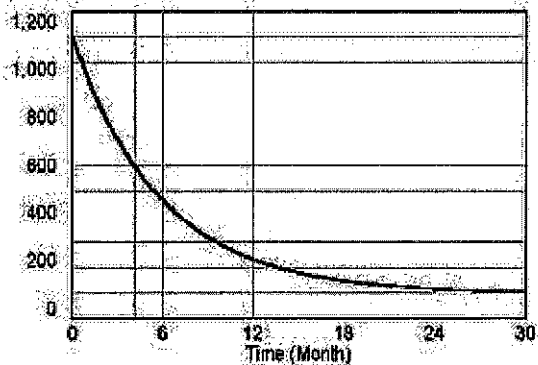
Y-Intercept: _____

Increasing/Decreasing: _____

Domain: _____

Range: _____

4.



Y-Intercept: _____

Increasing/Decreasing: _____

Domain: _____

Range: _____

See teacher for Answer Key