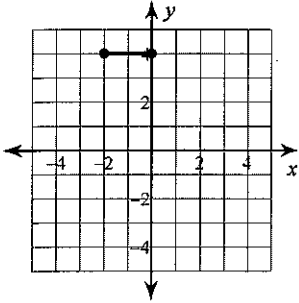


Lesson 3 Assignment Distance

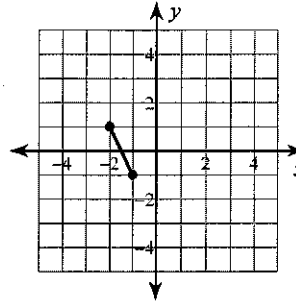
Date _____ Period _____

Find the distance between each pair of points.

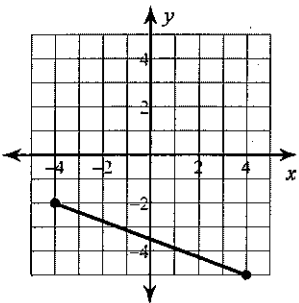
1)



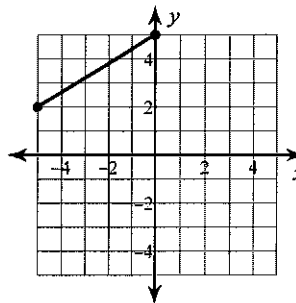
2)



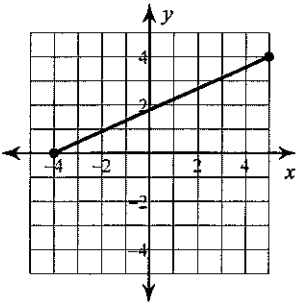
3)



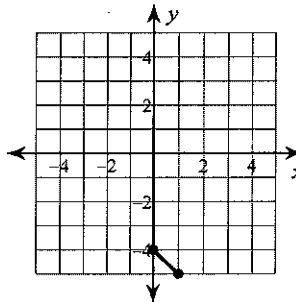
4)



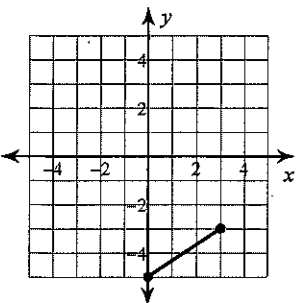
5)



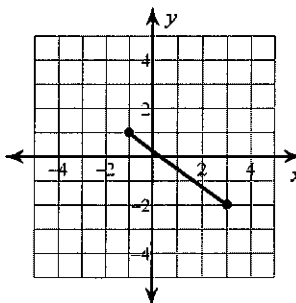
6)



7)



8)

9) $(0, 1), (3, -3)$ 10) $(-7, 8), (-6, -6)$

Answers to Lesson 3 Assignment Distance (ID: 1)

- 1) 2
- 5) $\sqrt{97}$
- 9) 5

- 2) $\sqrt{5}$
- 6) $\sqrt{2}$
- 10) $\sqrt{197}$

- 3) $\sqrt{73}$
- 7) $\sqrt{13}$

- 4) $\sqrt{34}$
- 8) 5